

Please don't feel like you have to print all of these and do them, adapt them to how you feel appropriate, these are just ideas!

Maths To get warmed up...

- Can you play a game of 'what number comes before/after' with your adult's?

For example:

What number comes before 4?

What number comes after 6?

- Can you practice writing your numbers in all the colours of the rainbow?




We are going to learn about...



<https://www.youtube.com/watch?v=ID9tjBUiXs0>

Number bonds are 2 numbers that make 10 or 20.
We are going to look at 2 numbers that make 10.

There are some activities and resources attached to this document.



Star Number Bonds to 10

Write the missing number to make each star equal to 10.

6 +

8 +

10 +

2 +

5 +

9 +

1 +

3 +

7 +

4 +

0 +

Star Number Bonds to 10 Answers

Write the missing number to make each star equal to 10.

6 + 4

8 + 2

10 + 0

2 + 8

5 + 5

9 + 1

1 + 9

3 + 7

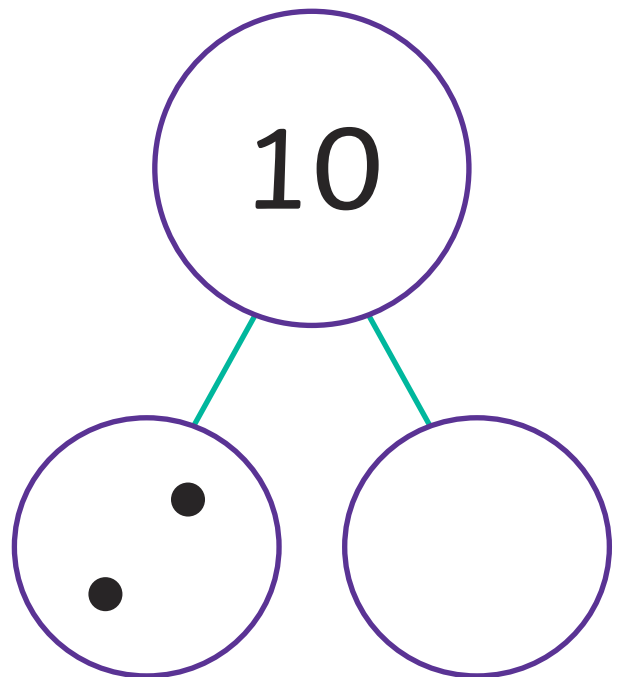
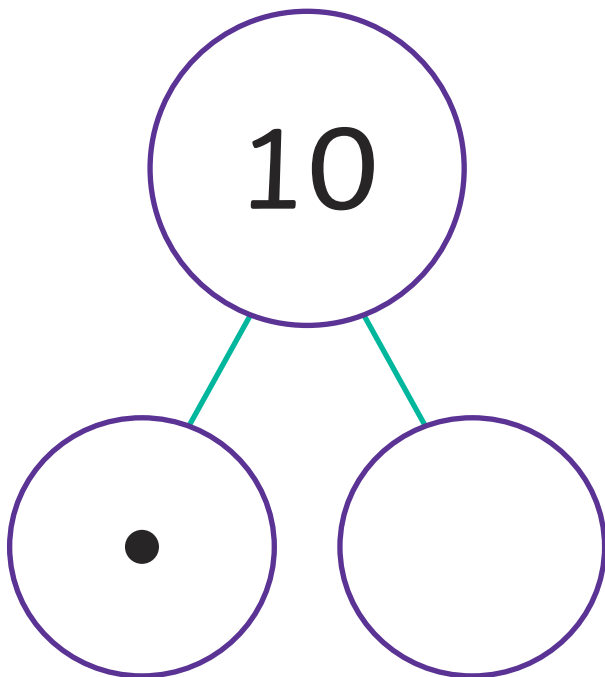
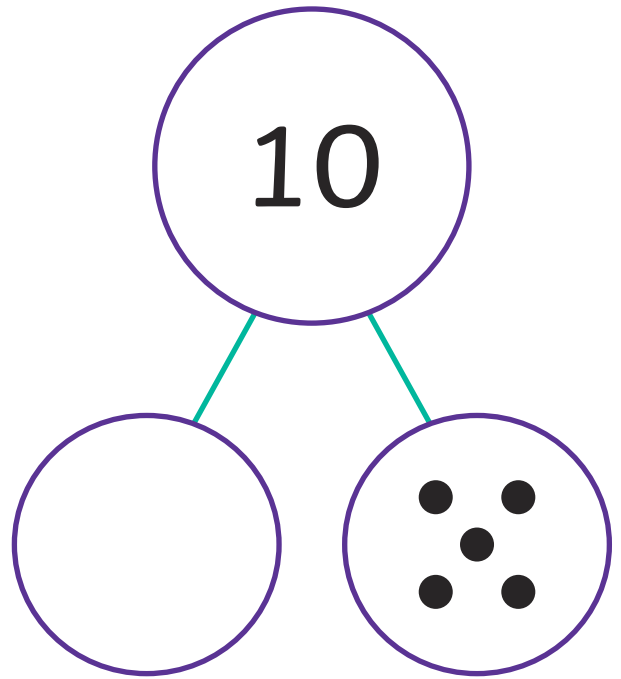
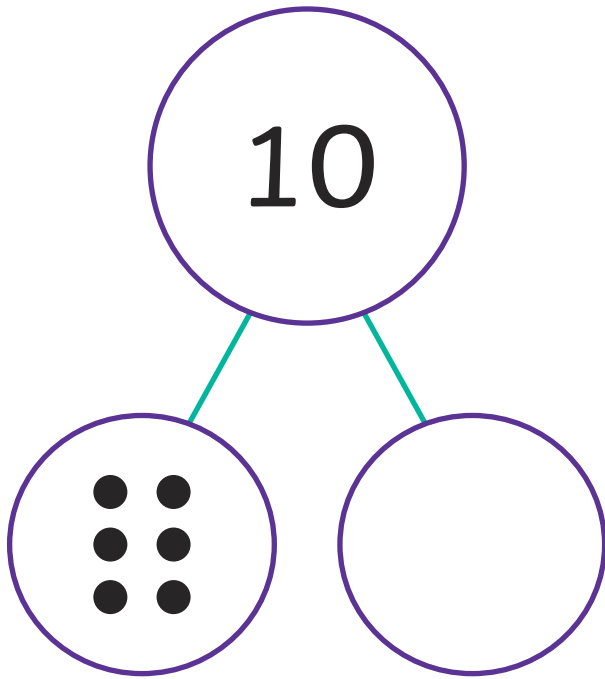
7 + 3

4 + 6

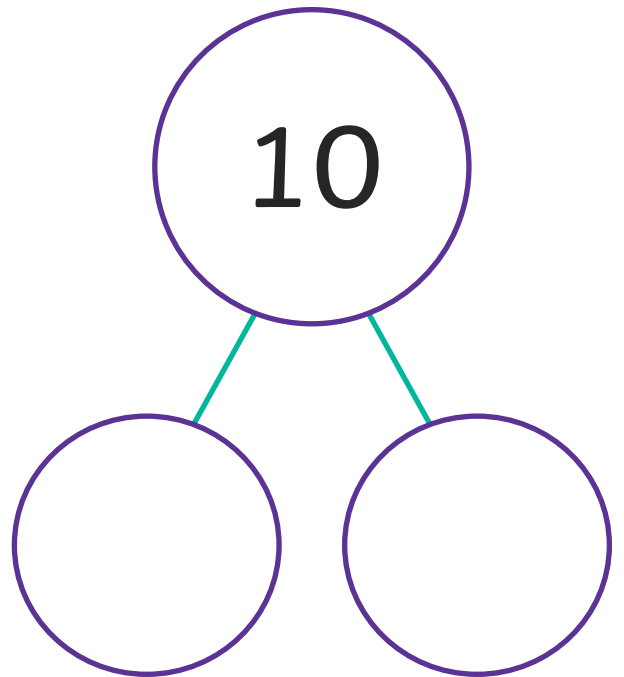
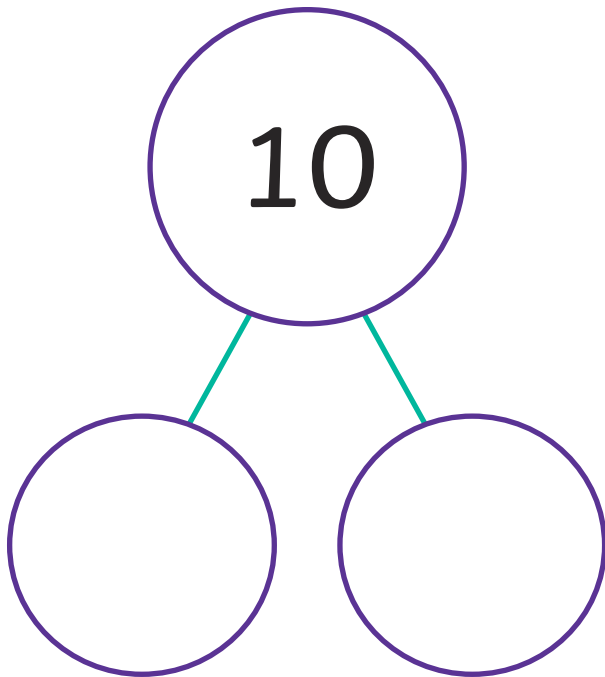
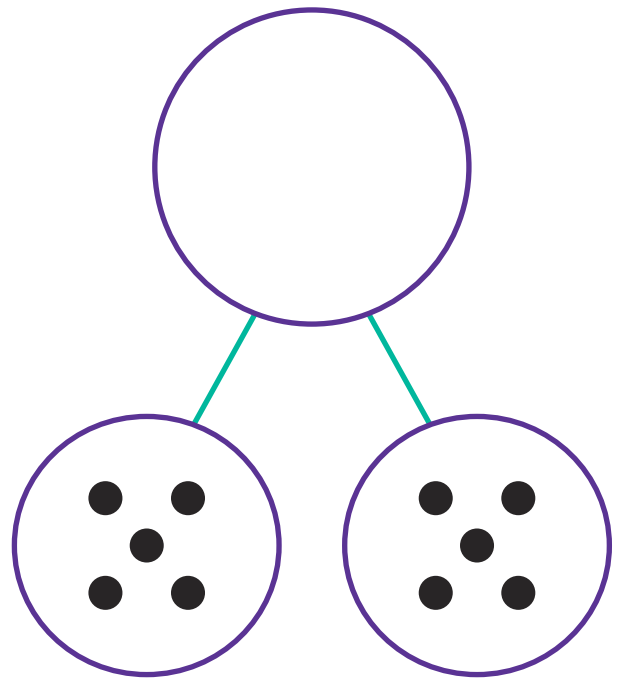
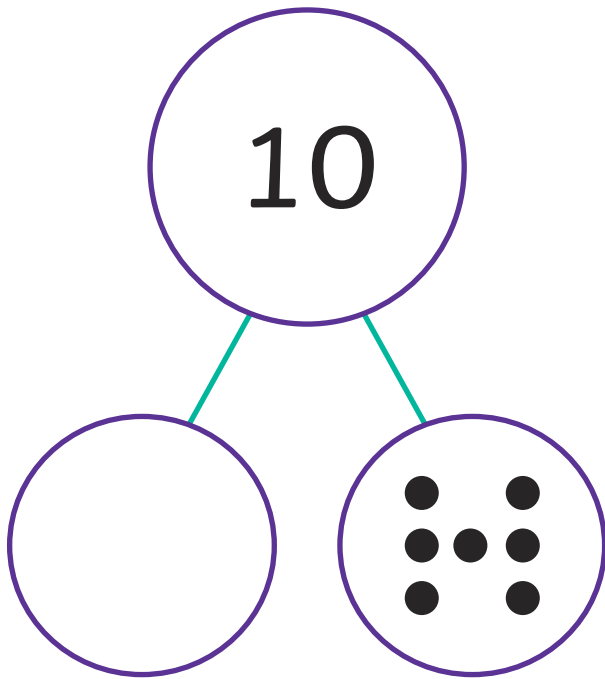
0 + 10

10

Part-Whole Number Bonds to 10



Part-Whole Number Bonds to 10




Bonds to 10 Bus Game

You will need:

- Dice
- Bus counters

Instructions:

- Roll the dice and move your bus counter along the road, the number of spaces the dice shows.
- Say the bond that makes 10 with the number in the square you land on.
- The first person to reach the bus stop is the winner.



Start		3	10	Go back one space.		5	0	4
8		6		4		8		Go back one space.
3		0		7		6		2
5		9		2		3		10
6		Go back one space.		1		Go back one space.		1
7		4		9		7		9
2	Go back one space.	1		Go back one space.	8	5		Finish

Number Bonds to 10 Number Line Challenge Cards



Number Bonds to 10 Number Line Challenge Cards

$$10 + \square = 10$$



Number Bonds to 10 Number Line Challenge Cards

$$9 + \square = 10$$



Number Bonds to 10 Number Line Challenge Cards

$$8 + \square = 10$$



Number Bonds to 10 Number Line Challenge Cards

$$7 + \square = 10$$



twinkl.com

Number Bonds to 10 Number Line Challenge Cards

$$6 + \square = 10$$



twinkl.com

Number Bonds to 10 Number Line Challenge Cards

$$5 + \square = 10$$



twinkl.com

Number Bonds to 10 Number Line Challenge Cards

$$4 + \square = 10$$



twinkl.com

Number Bonds to 10 Number Line Challenge Cards

$$3 + \square = 10$$



twinkl.com

Number Bonds to 10 Number Line Challenge Cards

$$2 + \square = 10$$



twinkl.com

Number Bonds to 10 Number Line Challenge Cards

$$1 + \square = 10$$



twinkl.com

Number Bonds to 10 Number Line Challenge Cards

$$0 + \square = 10$$



twinkl.com

Number Bonds to 10 Number Line Challenge Cards

$$\square + 10 = 10$$



twinkl.com

Number Bonds to 10 Number Line Challenge Cards

$$\square + 9 = 10$$



twinkl.com

Number Bonds to 10 Number Line Challenge Cards

$$\square + 8 = 10$$



twinkl.com

Number Bonds to 10 Number Line Challenge Cards

$$\square + 7 = 10$$



twinkl.com

Number Bonds to 10 Number Line Challenge Cards

$$\square + 6 = 10$$



twinkl.com

Number Bonds to 10 Number Line Challenge Cards

$$\square + 5 = 10$$



twinkl.com

Number Bonds to 10 Number Line Challenge Cards

$$\square + 4 = 10$$



twinkl.com

Number Bonds to 10 Number Line Challenge Cards

$$\square + 3 = 10$$



twinkl.com

Number Bonds to 10 Number Line Challenge Cards

$$\square + 2 = 10$$



Number Bonds to 10 Number Line Challenge Cards

$$\square + 1 = 10$$



Number Bonds to 10 Number Line Challenge Cards

$$\square + 0 = 10$$



Number Bonds to 10 Number Line Challenge Cards

$$0 + 10 = \square$$



Number Bonds to 10 Number Line Challenge Cards

$$1 + 9 = \square$$



Number Bonds to 10 Number Line Challenge Cards

$$2 + 8 = \square$$



Number Bonds to 10 Number Line Challenge Cards

$$3 + 7 = \square$$



Number Bonds to 10 Number Line Challenge Cards

$$4 + 6 = \square$$



Number Bonds to 10 Number Line Challenge Cards

$$5 + 5 = \square$$



Number Bonds to 10 Number Line Challenge Cards

$$6 + 4 = \square$$



Number Bonds to 10 Number Line Challenge Cards

$$7 + 3 = \square$$



Number Bonds to 10 Number Line Challenge Cards

$$8 + 2 = \square$$



Number Bonds to 10 Number Line Challenge Cards

$$9 + 1 = \square$$



Number Bonds to 10 Number Line Challenge Cards

$$10 + 0 = \square$$

